



My Piggy Bank

I opened my piggy bank and this is what I found inside...



My Piggy Bank

Complete a frequency table for the coins in my piggy bank.



Coin	Number of coins
1p	3
2p	
5p	
10p	
20p	
50p	
£1	
£2	




Questions



Use the frequency table to help answer these questions.

- 1) Which of the coins is most common?
- 2) Which of the coins is the least common?
- 3) How many more £1 coins than 50p pieces?
- 4) How many copper coins are there?
- 5) How many silver coins are there?



Questions



- 6) How many coins altogether?
- 7) Which coins appeared less than 5 times?
- 8) Which coins appeared more than 10 times?
- 9) From your reading book choose a page and make a frequency table to show the numbers of letters that appear in each word.

Length of word	Frequency
1	
2	

